

Let's match them up! Draw a line from each character to their name and write their favorite number next to it.



"Hi! I'm Nina.
My favorite
number
is ____."



"Hello!
I'm Sevenster.
My favorite
number
is ____."



"Hi! I'm Tweet.
My favorite
number
is ____."



"Hi! I'm Flora.
My favorite
number
is ____."



"Hi! I'm Fourg.
My favorite
number
is ____."

"Hi! I'm Thrico.
My favorite
number
is ____."



"Hi! I'm Sixby.
My favorite
number
is ____."



"Hello!
I'm Eighton.
My favorite
number
is ____."



Who met Sixby where? Use the map to match each character to the spot where they met Sixby.



 Welcome to the TT Forest Adventure! 
Join a Grouping Adventure with Tweet, Sixby, Thrico, and their friends
to solve fun puzzles with groups and multiplication.



Tweet wants you to circle every pair of Twintint leaves on Sixby's head wreath.




How many groups did you make? -----

What multiplication goes with your groups? --- X --- = ---



Thrco can carry only 3 berries at a time, more than that might turn into a squishy mess! Can you circle every 3 berries?




How many groups did you make? -----

What multiplication goes with your groups? --- X --- = ---



Fourg loves lilies—and loves to jump! Every time you circle 4 lilies, imagine Fourg jumping over them.



How many groups did you make? -----


What multiplication goes with your groups? --- X --- = ---





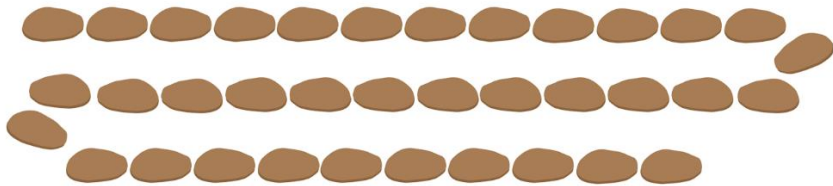
Flora loves five-petaled flowers. For these bunches, could you write the total number of petals in each?







Sixby wants to cross the waterfall by jumping over 6 stones at a time. Circle every 6 stones.

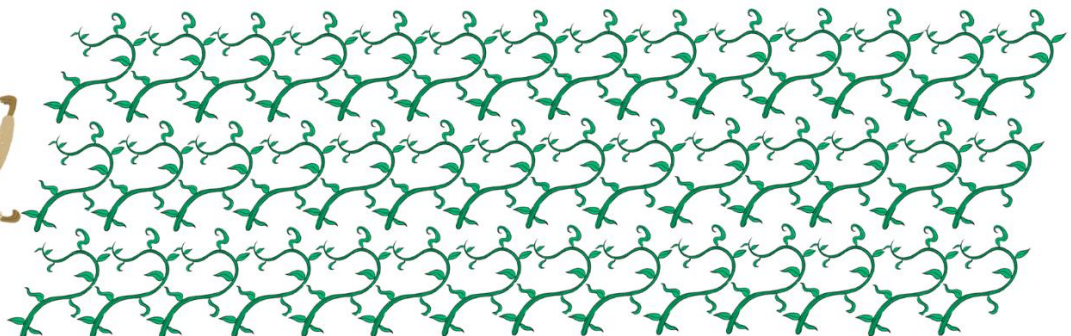


How many jumps does he need? ----

What multiplication goes with your groups? --- X --- = ---



Sevenster can cut seven vines at a time with his sharp claws. Circle every 7 vines to get them ready to cut.



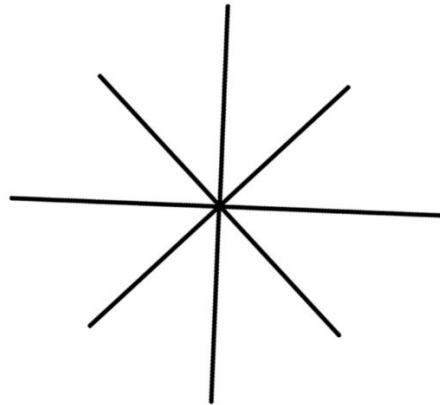
How many groups did you make? -----

What multiplication goes with your groups? --- X --- = ---





Can you help Eighton weave her web? Draw her 8-sided web with 6 layers.




How many sides does her web have in total? ----

What multiplication goes with her web? --- X --- = ---



Nina wants to catch fish for Crocky54 to help her cross the river. She can catch 9 fish at a time. Circle every 9 fish.



How many groups did you make? -----

What multiplication goes with your groups? --- X --- = ---



Great Job!

You did an amazing job working with groups and multiplication.
Keep up the fantastic effort!





Let's Color Sixby and His Favorite 6!

6



Write the multiplication for each badge.



Well done, for collecting all your badges!

Celebrate with cheerful Flora in the sunny meadow!

